






# Addition and Subtraction Worksheets





How many pictures do you see in each row if you remove the pictures that are circled?




$$6 - 2 =$$



$$7 - 4 =$$



$$6 - 3 =$$



$$8 - 5 =$$

