





Basic Subtraction Worksheets



Fill out the box the right answer.



$$2 - 1 = \square$$




$$3 - 2 = \square$$



$$4 - 1 = \square$$



$$2 - 1 = \square$$



$$2 - 2 = \square$$