

Student Name: \_\_\_\_\_

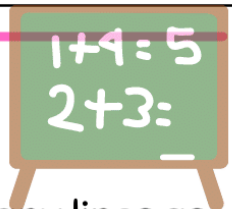
Teacher: \_\_\_\_\_

Class: \_\_\_\_\_

Date: \_\_\_\_\_



# Addition Worksheet



Write the number of fruits in the boxes below. Let's draw as many lines as the total number of fruits in the big box..




+



2

1


3



+



+



+

