

Student Name: _____

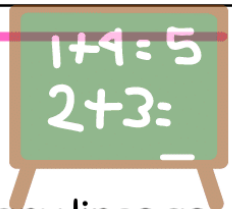
Teacher: _____

Class: _____


Date: _____




Addition Worksheet




Write the number of fruits in the boxes below. Let's draw as many lines as the total number of fruits in the big box..




+



=



+



=



+



=



+



=

