

Student Name: _____

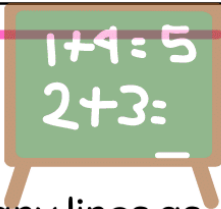
Teacher: _____

Class: _____


Date: _____




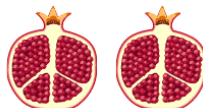
Addition Worksheet



Write the number of fruits in the boxes below. Let's draw as many lines as the total number of fruits in the big box..





+



+



+



+

