


Student Name: \_\_\_\_\_

Teacher: \_\_\_\_\_

Class: \_\_\_\_\_



Date: \_\_\_\_\_



# Subtraction Worksheet

Solve the subtraction by crossing out the numbers to be subtracted.

Write the answers in the box.




$8 - 4 =$



$9 - 6 =$



$10 - 3 =$



$9 - 5 =$

