


Student Name: _____

Teacher: _____

Class: _____

Date: _____




Subtraction Worksheet


Cross out the correct number of animals to help you solve the subtraction problems below. Write the correct solution in the space provided.



$$3 - 1 = \underline{\quad}$$



$$4 - 3 = \underline{\quad}$$



$$6 - 4 = \underline{\quad}$$
