


Student Name: _____

Teacher: _____

Class: _____

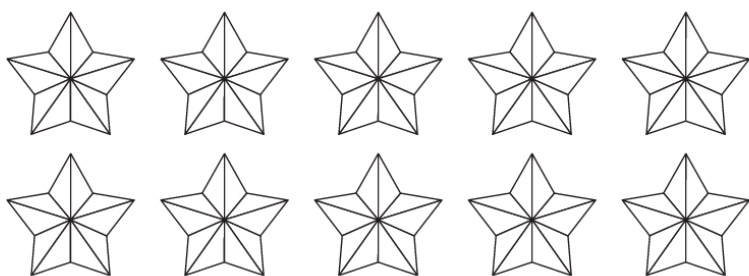
Date: _____



Subtraction Worksheet

Solve the subtraction by crossing out the numbers to be subtracted.

Write the answers in the box.



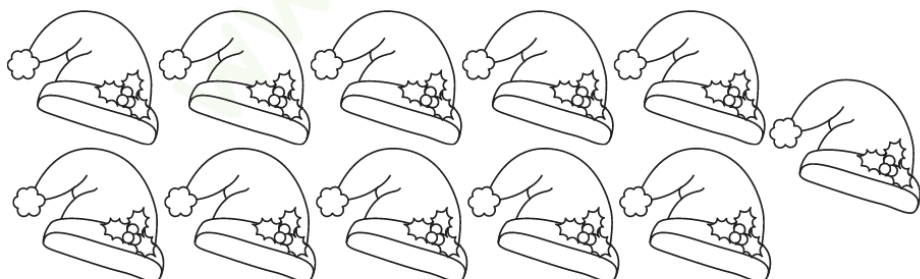
$10 - 8 =$



$14 - 5 =$



$13 - 6 =$



$11 - 4 =$

