

Student Name: _____


Teacher: _____

Class: _____

Date: _____




Subtraction Worksheet




Cross out the correct number of Christmas items to help you solve the subtraction problems below. Write the correct solution in the space provided.



$$10 - 5 = \underline{\quad}$$



$$7 - 6 = \underline{\quad}$$



$$10 - 8 = \underline{\quad}$$

