

Student Name: _____

Teacher: _____

Class: _____


Date: _____





Addition





Let's add the numbers!


$$\begin{array}{r} 4 \\ +2 \\ \hline \end{array}$$


$$\begin{array}{r} 3 \\ +5 \\ \hline \end{array}$$


$$\begin{array}{r} 10 \\ +9 \\ \hline \end{array}$$


$$\begin{array}{r} 10 \\ +7 \\ \hline \end{array}$$


$$\begin{array}{r} 1 \\ +9 \\ \hline \end{array}$$


$$\begin{array}{r} 4 \\ +3 \\ \hline \end{array}$$


$$\begin{array}{r} 10 \\ +8 \\ \hline \end{array}$$


$$\begin{array}{r} 10 \\ +10 \\ \hline \end{array}$$
