

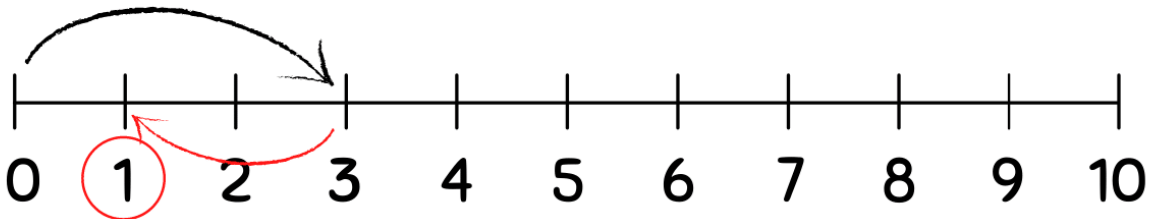
Student Name: \_\_\_\_\_ Teacher: \_\_\_\_\_

Class: \_\_\_\_\_ Date: \_\_\_\_\_

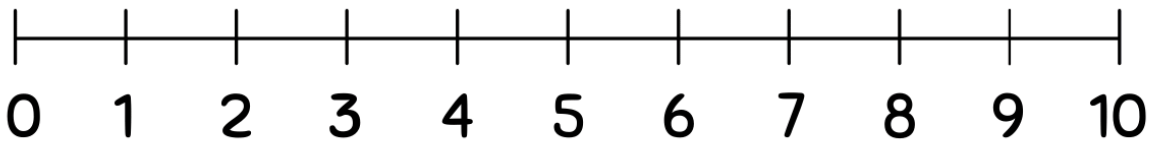
# Subtracting Using Number Lines(0-10)

Use the number lines to complete the subtraction problems.

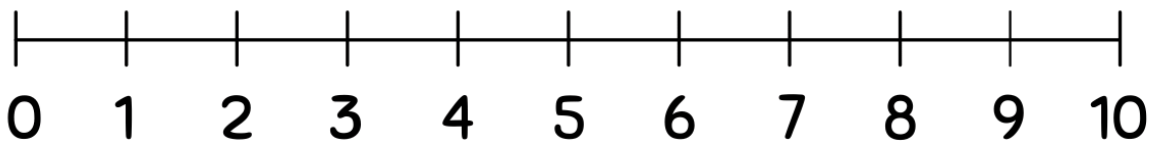
Example:



$$3 - 2 = 1$$



$$2 - 1 = \boxed{?}$$



$$4 - 2 = \boxed{?}$$

