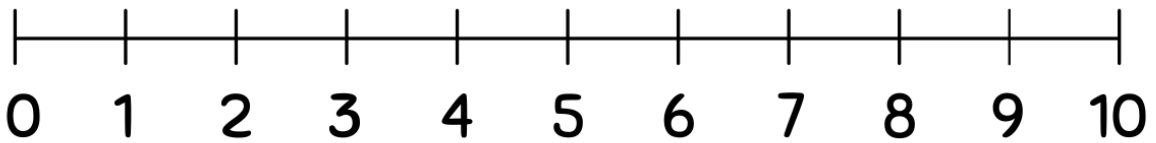


Student Name: \_\_\_\_\_ Teacher: \_\_\_\_\_

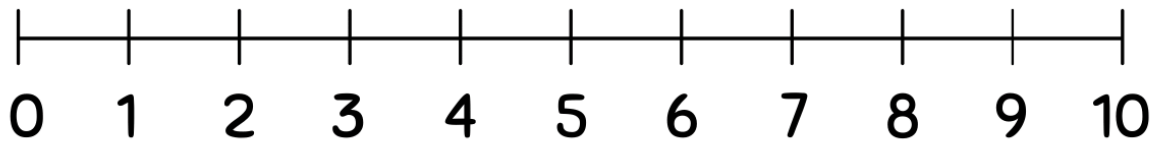
Class: \_\_\_\_\_ Date: \_\_\_\_\_

# Subtracting Using Number Lines(0-10)

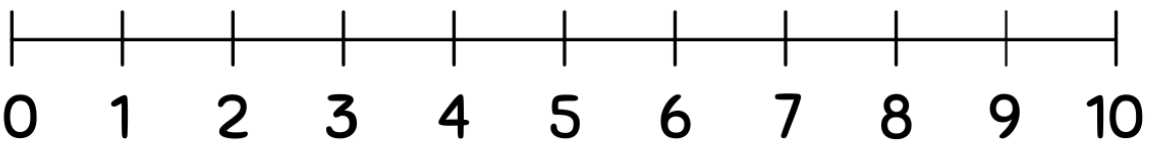
Use the number lines to complete the subtraction problems.



$$2 - 1 =$$



$$4 - 1 =$$



$$3 - 2 =$$

