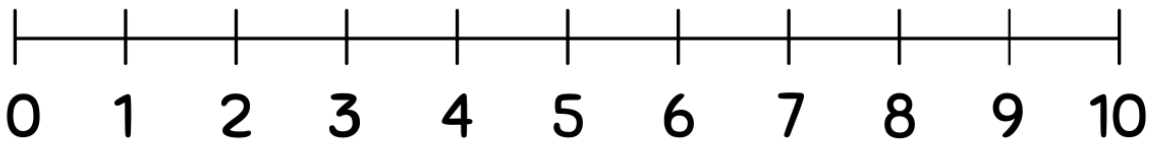


Student Name: _____ Teacher: _____

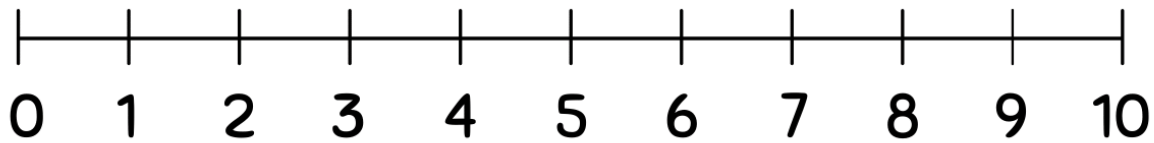
Class: _____ Date: _____

Subtracting Using Number Lines(0-10)

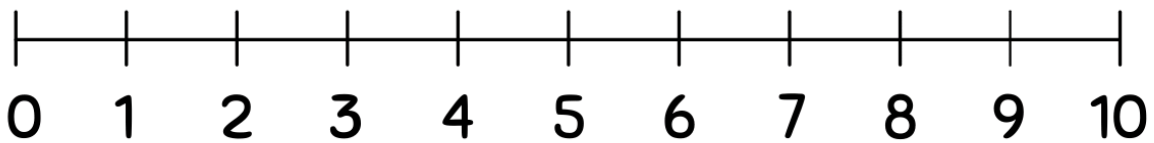
Use the number lines to complete the subtraction problems.



$$4 - 3 = \boxed{?}$$



$$4 - 4 = \boxed{?}$$



$$5 - 1 = \boxed{?}$$