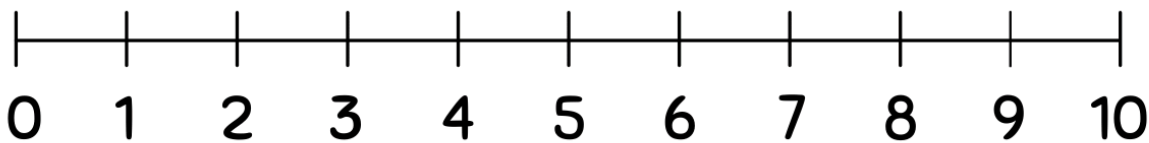


Student Name: \_\_\_\_\_ Teacher: \_\_\_\_\_

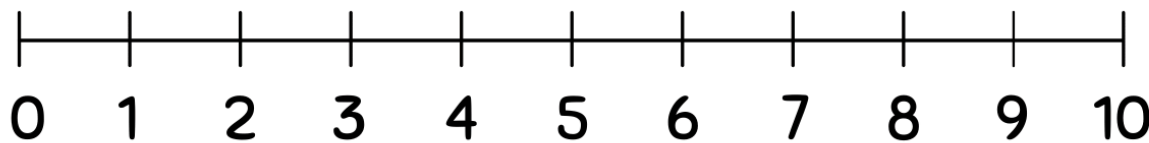
Class: \_\_\_\_\_ Date: \_\_\_\_\_

# Subtracting Using Number Lines(0-10)

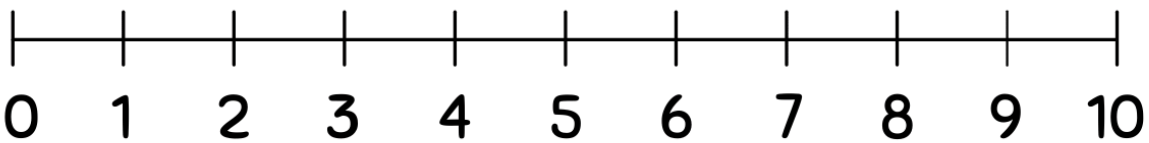
Use the number lines to complete the subtraction problems.



$$7 - 2 =$$



$$5 - 5 =$$



$$6 - 4 =$$

