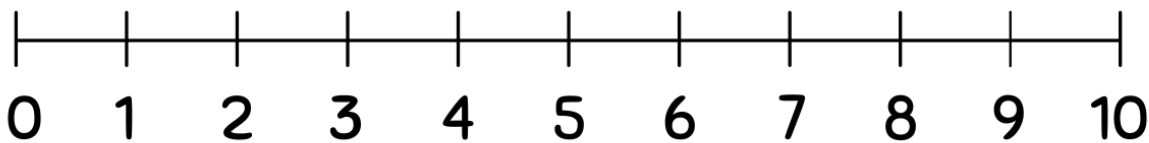


Student Name: _____ Teacher: _____

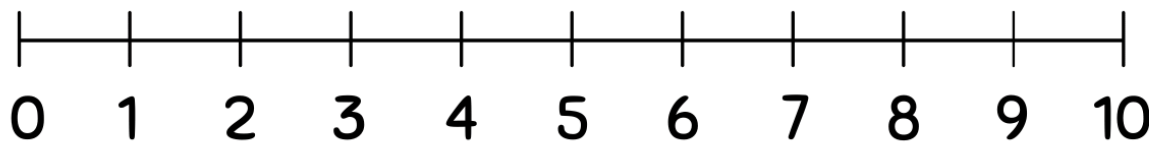
Class: _____ Date: _____

Subtracting Using Number Lines(0-10)

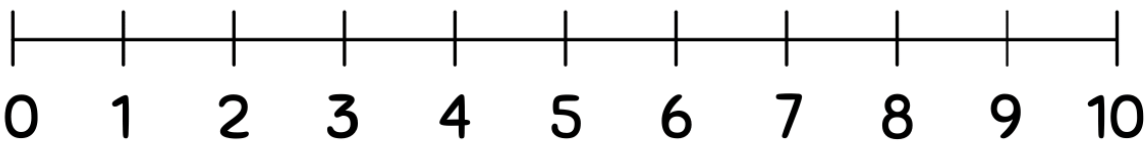
Use the number lines to complete the subtraction problems.



$$5 - 3 =$$



$$7 - 1 =$$



$$5 - 4 =$$

