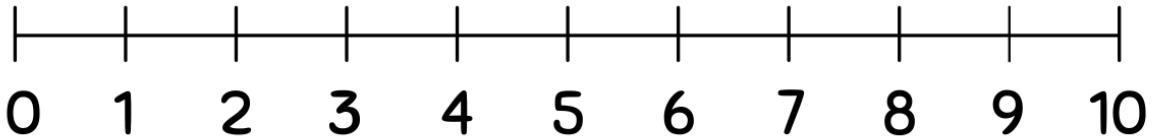


Student Name: _____ Teacher: _____

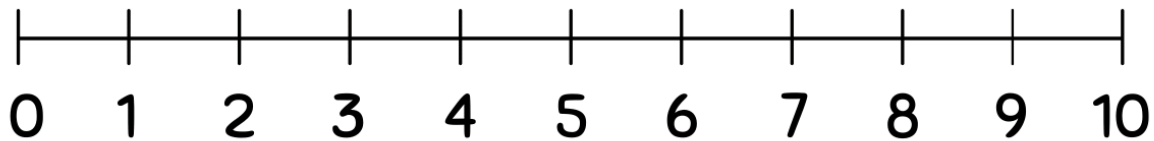
Class: _____ Date: _____

Subtracting Using Number Lines(0-10)

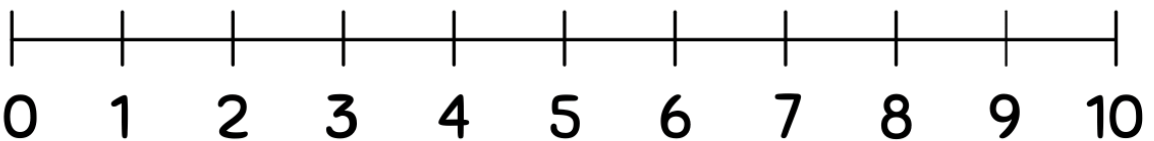
Use the number lines to complete the subtraction problems.



$$9 - 5 = \boxed{?}$$



$$10 - 1 = \boxed{?}$$



$$8 - 7 = \boxed{?}$$

