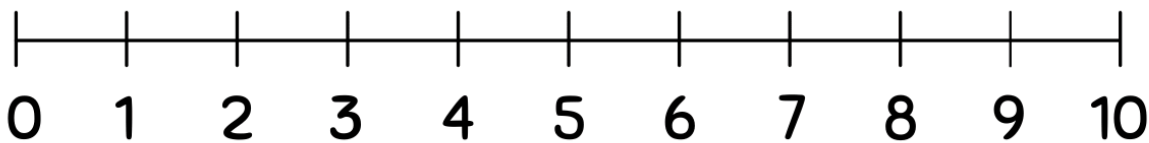


Student Name: \_\_\_\_\_ Teacher: \_\_\_\_\_

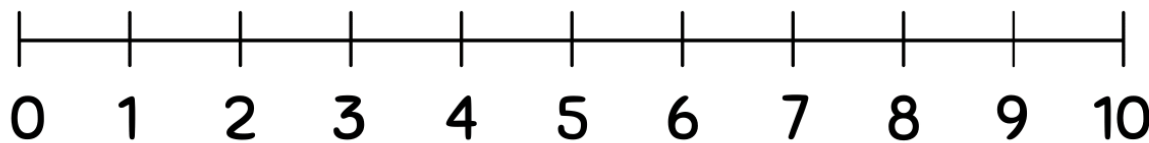
Class: \_\_\_\_\_ Date: \_\_\_\_\_

# Subtracting Using Number Lines(0-10)

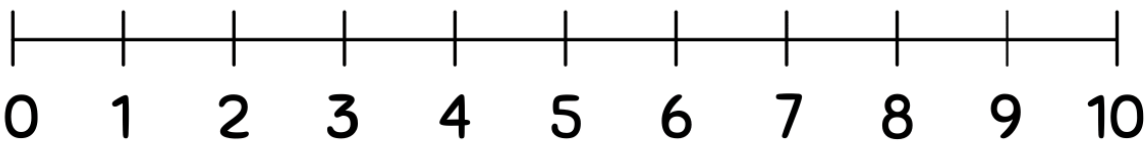
Use the number lines to complete the subtraction problems.



$$2 - 1 = \boxed{?}$$



$$10 - 6 = \boxed{?}$$



$$9 - 9 = \boxed{?}$$

