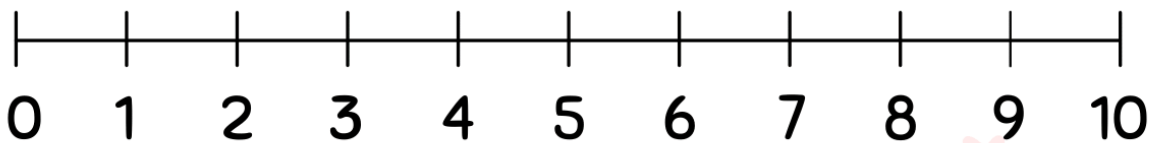


Student Name: _____ Teacher: _____

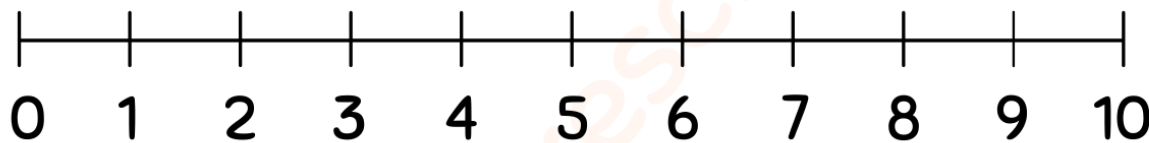
Class: _____ Date: _____

Adding Using Number Lines(0-10)

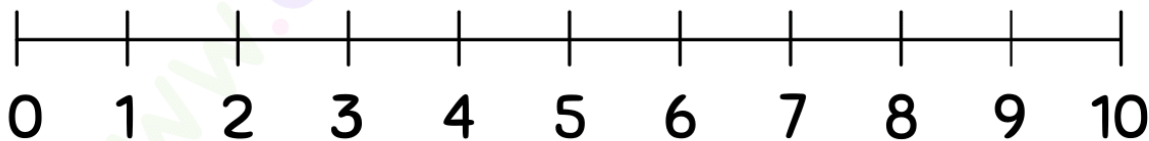
Use the number lines to complete the addition problems.



$$7 + 2 = \square$$



$$5 + 3 = \square$$



$$2 + 3 = \square$$

