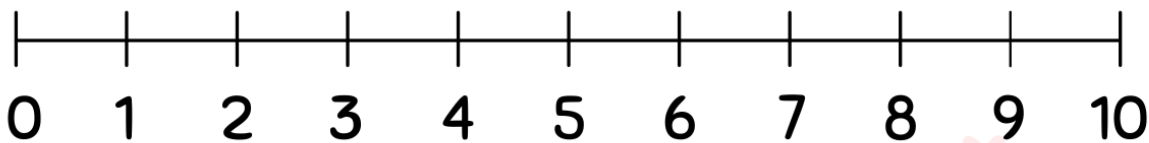


Student Name: _____ Teacher: _____

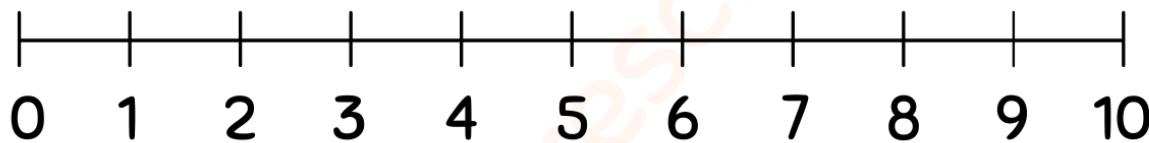
Class: _____ Date: _____

Adding Using Number Lines(0-10)

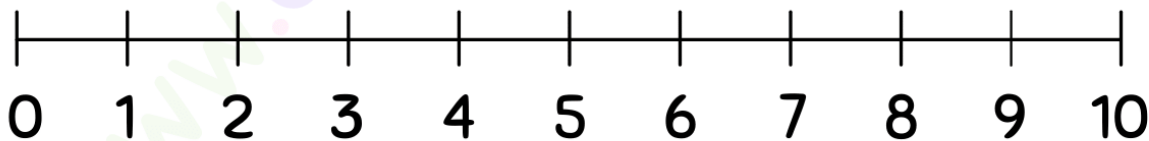
Use the number lines to complete the addition problems.



$$1 + 6 = \square$$



$$3 + 7 = \square$$



$$0 + 9 = \square$$

